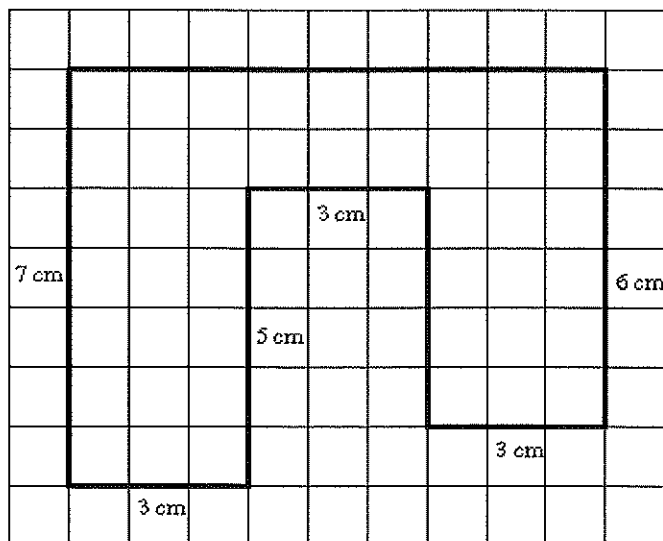


1. Find the area and perimeter of the shape below.



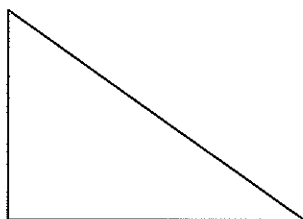
Perimeter: _____

Area: _____


2. Write the formula for finding the area of a rectangle. _____
3. Write the formula for finding the area of a parallelogram. _____
4. Write the formula for finding the area of a triangle. _____
5. Find the area of the following shapes. (Measure to nearest $\frac{1}{2}$ cm)



Area _____



Area _____



Area _____